

FICHE N° 4 — FIGURES

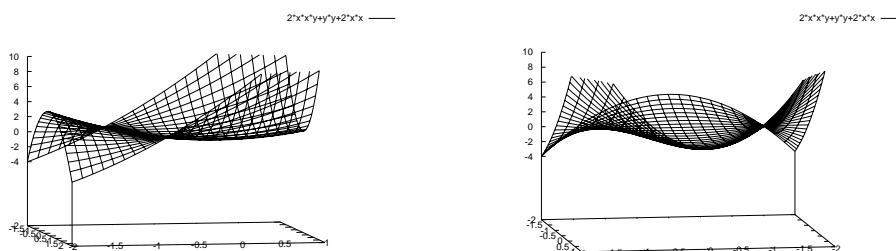


FIG. 1 – $f_1(x, y) = 2x^2y + y^2 + 2x^2$ (exercice 6)

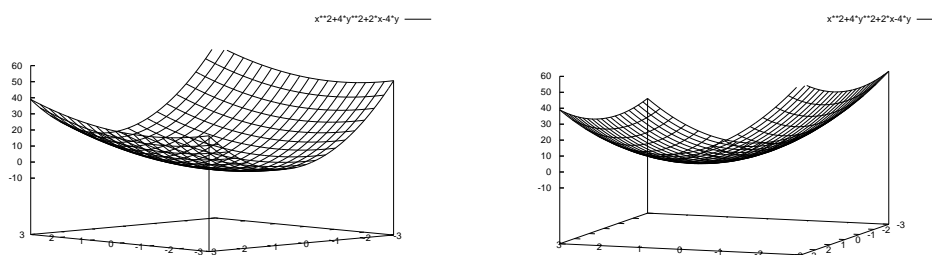


FIG. 2 – $f_2(x, y) = x^2 + 4y^2 + 2x - 4y$ (exercice 7)

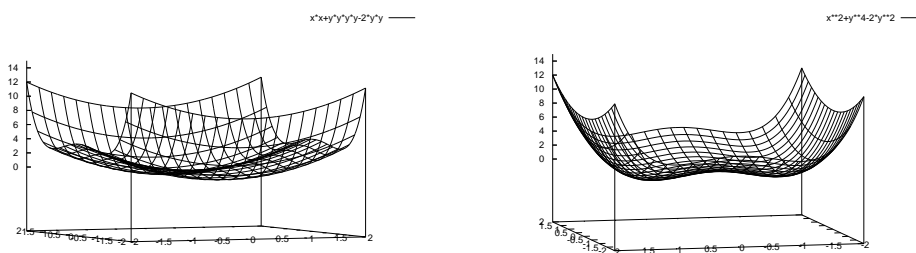


FIG. 3 – $f(x, y) = x^2 + y^4 - 2y^2$ (exercice 7)

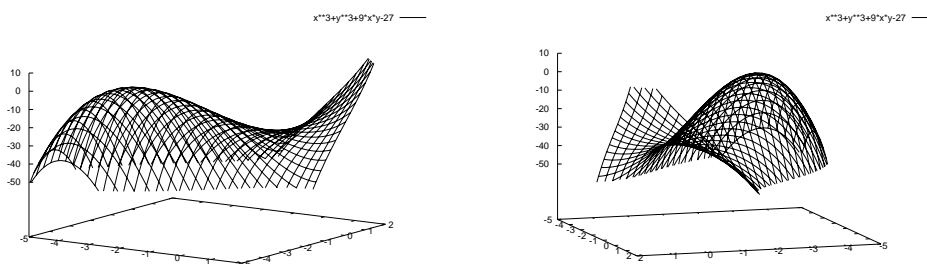


FIG. 4 – $f(x, y) = x^3 + y^3 + 9xy - 3^3$ (exercice 7)